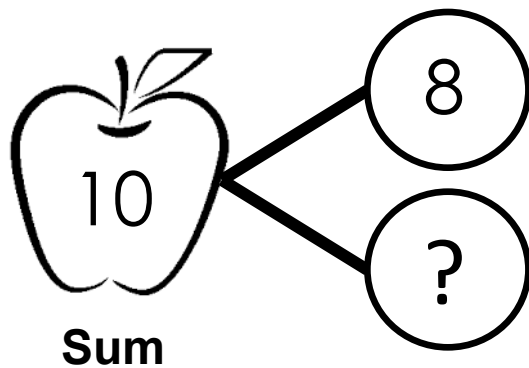


I ran in the grass to go pick apples from a tree. First, I picked 8 red apples. Then, I picked some yellow apples. When I was done there were 10 apples in my bag. How many yellow apples did I pick to have 10 apples in all?

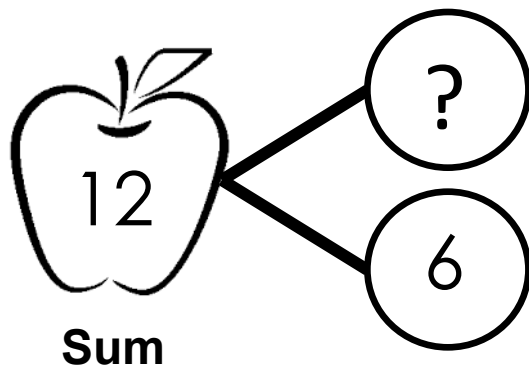


$$8 + \underline{\hspace{2cm}} = 10$$

Unknown Addend                  Sum

--	--	--	--	--	--	--	--	--	--	--

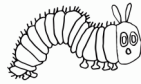
A boy was bragging that he picked 12 apples. First, he picked some green apples. Then, he picked 6 red apples. When he was done there were 12 apples in his bag. How many green apples did he pick to have 12 apples in all?



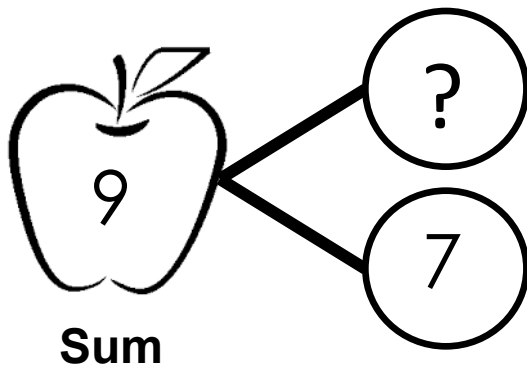
$$\underline{\hspace{2cm}} + 6 = 12$$

Unknown Addend                      Sum

--	--	--	--	--	--	--	--	--	--	--	--	--



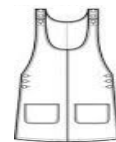
A very hungry caterpillar went in 9 apples. First, it went in some green apples. Then, it went in 7 yellow apples. When it was done there were holes in 9 apples. How many green apples did it go in to make 9 holes in all?



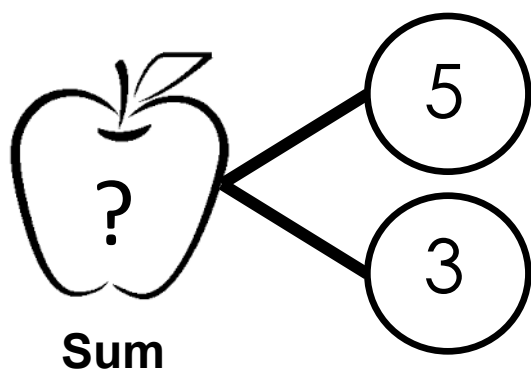
$$\underline{\hspace{2cm}} + 7 = 9$$

Unknown Addend Sum

--	--	--	--	--	--	--	--	--	--



A girl put some apple seeds in her dress pocket. First, she picked up 5 seeds. Then, she picked 3 more seeds up. How many seeds were in her pocket?



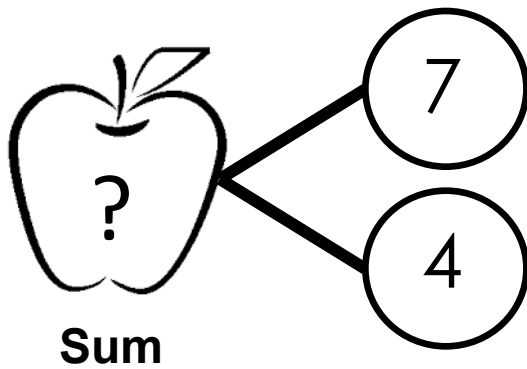
$$5 + 3 = \underline{\hspace{2cm}}$$

Unknown Sum

--	--	--	--	--	--	--	--	--



A dog took some apples and put them in his doghouse.  
First, he took 7 red apples. Then, he took 4 yellow apples.  
How many apples were in his doghouse?



$$7 + 4 = \underline{\hspace{2cm}}$$

Unknown Sum

--	--	--	--	--	--	--	--	--	--	--	--